



SNS COLLEGE OF TECHNOLOGY

(An Autonomous Institution)

Approved by AICTE, New Delhi, Affiliated to Anna University, Chennai

Accredited by NAAC-UGC with 'A++' Grade (Cycle III) &

Accredited by NBA (B.E - CSE, EEE, ECE, Mech & B.Tech.IT)



MIRROR IMAGE

1. Choose the alternative which is closely resembles the mirror image of the given combination.

ANS43Q12

- (1) ANS43Q12 (2) ANS43Q12
(3) 21Q34ANS (4) 21Q34ANS

(a) 1 (b) 2 (c) 3 (d) 4

2. Choose the alternative which is closely resembles the mirror image of the given combination.

TARA IN 1014A

- (1) ARA IN 1014A (2) ARA IN 1014A
(3) ARA IN 1014A (4) ARA IN 1014A

(a) 1 (b) 2 (c) 3 (d) 4

3. Choose the alternative which is closely resembles the mirror image of the given combination.

1965 IN DOPAK

- (1) 5961 IN DOPAK (2) 5961 IN DOPAK
(3) 5961 IN DOPAK (4) 5961 IN DOPAK

(a) 1 (b) 2 (c) 3 (d) 4

4. Choose the alternative which is closely resembles the mirror image of the given combination.

MALAYALAM

- (1) MALAYALAM (2) MALAYALAM
(3) MALAYALAM (4) MALAYALAM

(a) 1 (b) 2 (c) 3 (d) 4

5. Choose the alternative which is closely resembles the mirror image of the given combination.

EFFECTIVE

- (1) EFFECTIVE (2) EFFECTIVE
(3) EFFECTIVE (4) EFFECTIVE

(a) 1 (b) 2 (c) 3 (d) 4



SNS COLLEGE OF TECHNOLOGY

(An Autonomous Institution)

Approved by AICTE, New Delhi, Affiliated to Anna University, Chennai

Accredited by NAAC-UGC with 'A++' Grade (Cycle III) &

Accredited by NBA (B.E - CSE, EEE, ECE, Mech & B.Tech.IT)



WATER IMAGE

1. Choose the alternative which is closely resembles the water-image of the given combination.

NUCLEAR

(1) БΛΕΓCUI

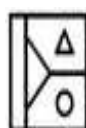
(2) ИΠCTEΛΒ

(3) ИΠCΓEΛΒ

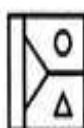
(4) ИΠCΓEΛΒ

(a) 1 (b) 2 (c) 3 (d) 4

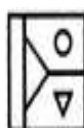
2. Choose the correct water image of the given figure (X) from amongst the four alternatives.



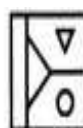
(X)



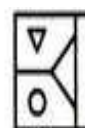
(1)



(2)



(3)



(4)

(a) 1 (b) 2 (c) 3 (d) 4

3. Choose the correct water image of the given figure (X) from amongst the four alternatives.



(X)



(1)



(2)



(3)



(4)

(a) 1 (b) 2 (c) 3 (d) 4

4. Choose the correct water image of the given figure (X) from amongst the four alternatives.



(X)



(1)



(2)



(3)



(4)

(a) 1 (b) 2 (c) 3 (d) 4

5. Choose the correct water image of the given figure (X) from amongst the four alternatives.



(X)



(1)



(2)



(3)



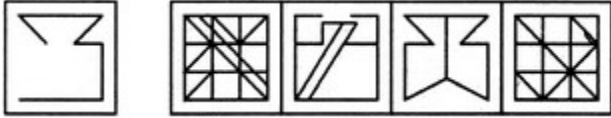
(4)

(a) 1 (b) 2 (c) 3 (d) 4



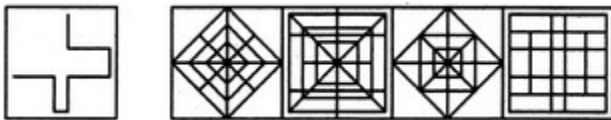
EMBEDDED IMAGES

1. Find out the alternative figure which contains figure (X) as its part.



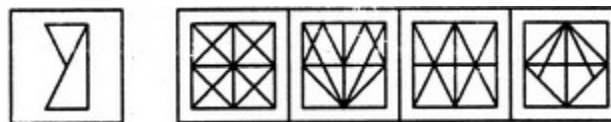
(a) 1 (b) 2 (c) 3 (d) 4

2. Find out the alternative figure which contains figure (X) as its part.



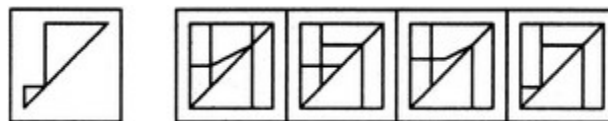
(a) 1 (b) 2 (c) 3 (d) 4

3. Find out the alternative figure which contains figure (X) as its part.



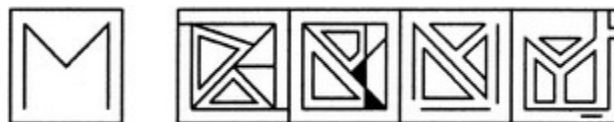
(a) 1 (b) 2 (c) 3 (d) 4

4. Find out the alternative figure which contains figure (X) as its part.



(a) 1 (b) 2 (c) 3 (d) 4

5. Find out the alternative figure which contains figure (X) as its part.



(a) 1 (b) 2 (c) 3 (d) 4