



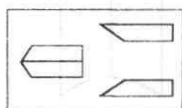
SNS COLLEGE OF TECHNOLOGY
(An Autonomous Institution)
Coimbatore – 641 035
DEPARTMENT OF MATHEMATICS
23GET276 & VQAR-II



ODD - MAN - OUT (FIGURES)

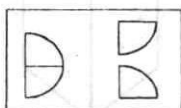
Each question consists of five figures. Of these, four figures are alike in some way, while one is different in terms of some characteristics. Identify the one which does not belong to the group.

1.



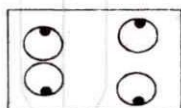
1

(1) 1



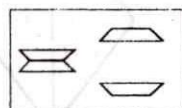
2

(2) 2




3

(3) 3



4

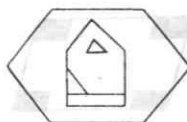
(4) 4



5

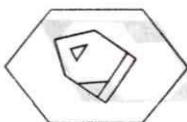
(5) 5

2.



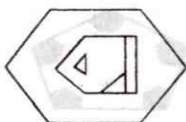
1

(1) 1



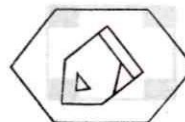
2

(2) 2



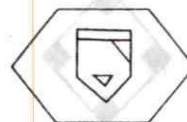
3

(3) 3



4

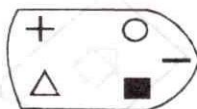
(4) 4



5


(5) 5

3.




1

(1) 1




2

(2) 2



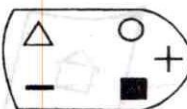
3

(3) 3



4

(4) 4



5

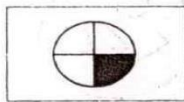
(5) 5



SNS COLLEGE OF TECHNOLOGY
(An Autonomous Institution)
Coimbatore – 641 035
DEPARTMENT OF MATHEMATICS
23GET276 & VQAR-II



4.



1

(1) 1



2

(2) 2



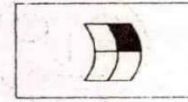
3

(3) 3



4

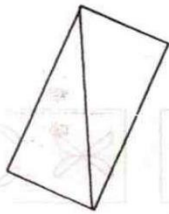
(4) 4



5

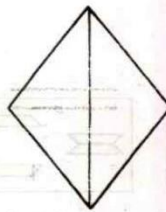
(5) 5

5.



1

(1) 1



2

(2) 2




3

(3) 3



4

(4) 4



5

(5) 5

6.



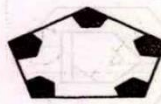
1

(1) 1



2

(2) 2



3

(3) 3



4

(4) 4



5

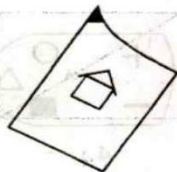
(5) 5

7.



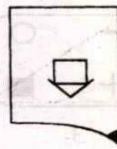
1

(1) 1



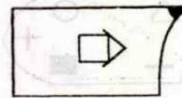
2

(2) 2



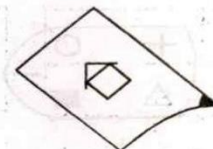
3

(3) 3



4

(4) 4



5


(5) 5



SNS COLLEGE OF TECHNOLOGY
(An Autonomous Institution)
Coimbatore – 641 035
DEPARTMENT OF MATHEMATICS
23GET276 & VQAR-II

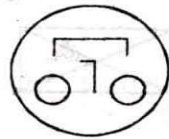


8.



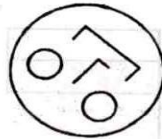
1

(1) 1



2

(2) 2



3

(3) 3



4

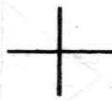
(4) 4



5

(5) 5

9.



1

(1) 1



2

(2) 2



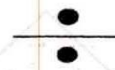
3

(3) 3



4

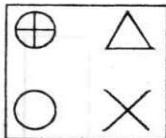
(4) 4



5

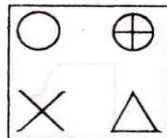
(5) 5

10.



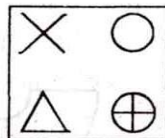
1

(1) 1



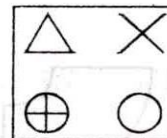
2

(2) 2



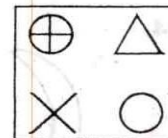
3

(3) 3



4


(4) 4



5

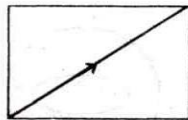
(5) 5

11.



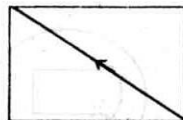
1

(1) 1



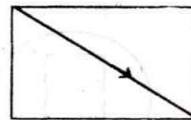
2

(2) 2




3

(3) 3



4

(4) 4



5

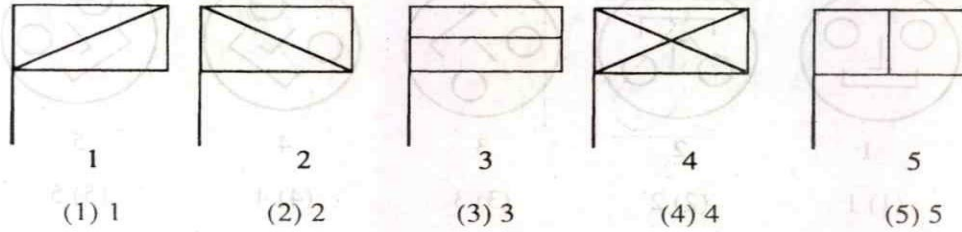
(5) 5



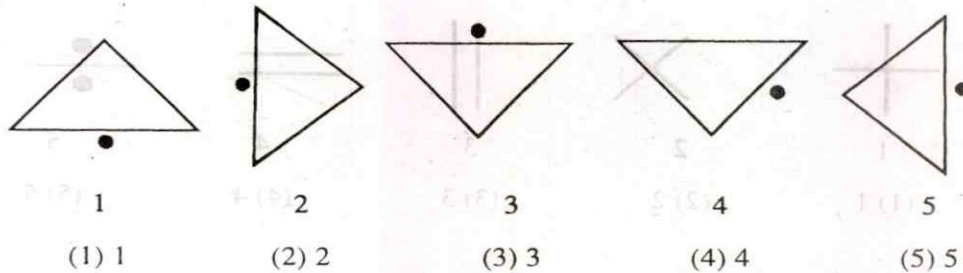
SNS COLLEGE OF TECHNOLOGY
(An Autonomous Institution)
Coimbatore – 641 035
DEPARTMENT OF MATHEMATICS
23GET276 & VQAR-II



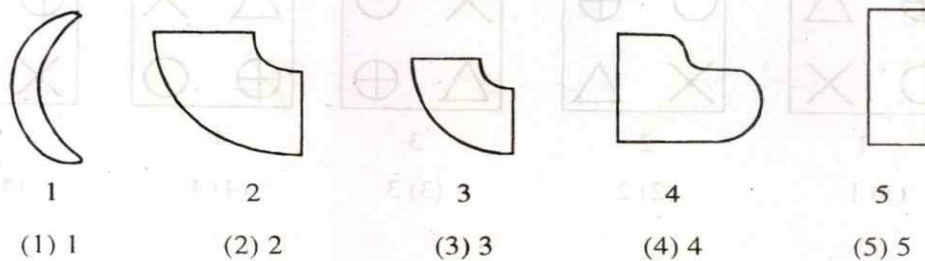
12.



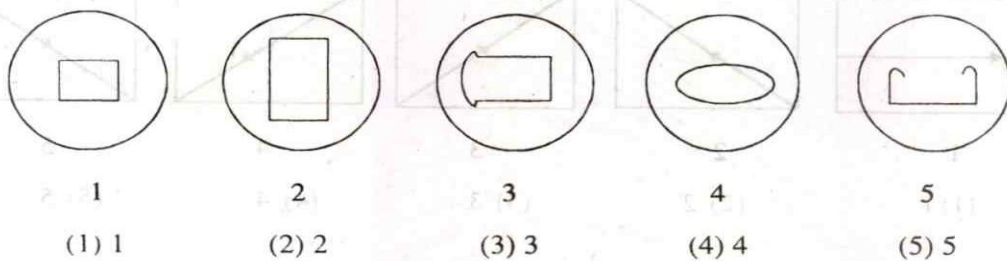
13.



14.



15.

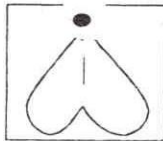




SNS COLLEGE OF TECHNOLOGY
(An Autonomous Institution)
Coimbatore – 641 035
DEPARTMENT OF MATHEMATICS
23GET276 & VQAR-II

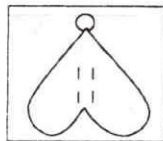


16.



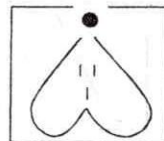
1

(1) 1



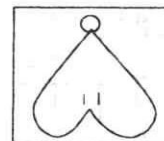
2

(2) 2



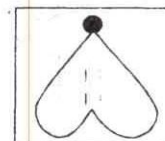
3

(3) 3



4

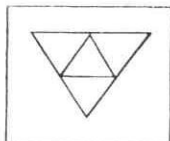
(4) 4



5

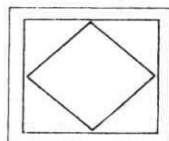
(5) 5

17.



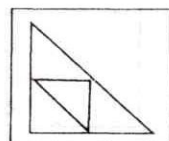
1

(1) 1



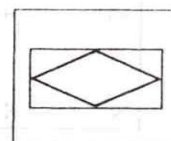
2

(2) 2



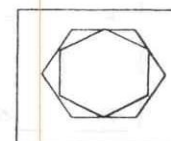
3

(3) 3



4

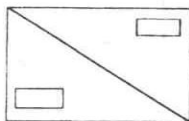
(4) 4



5

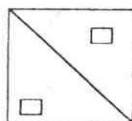
(5) 5

18.



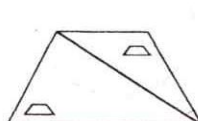
1

(1) 1



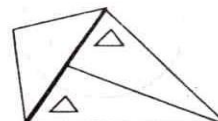
2

(2) 2



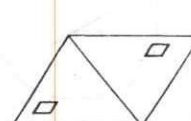
3

(3) 3



4


(4) 4



5


(5) 5

19.



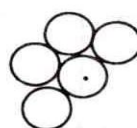
1

(1) 1



2

(2) 2



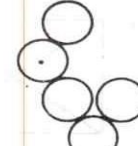
3

(3) 3



4

(4) 4



4

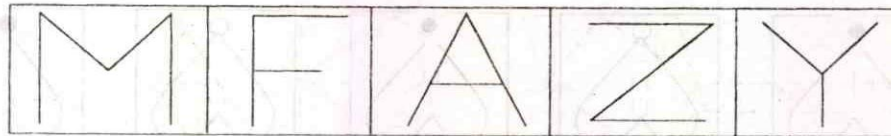
(5) 5



SNS COLLEGE OF TECHNOLOGY
(An Autonomous Institution)
Coimbatore – 641 035
DEPARTMENT OF MATHEMATICS
23GET276 & VQAR-II

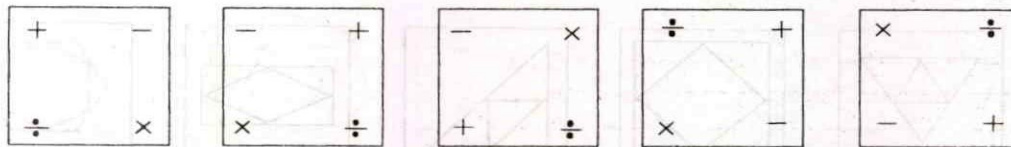


20.



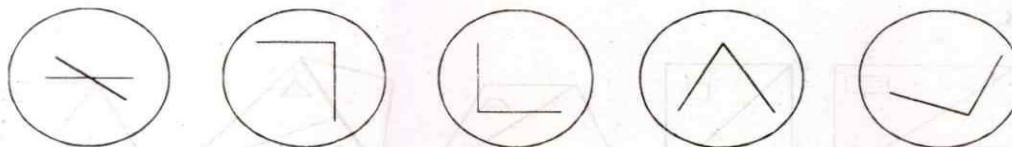
1 2 3 4 5
(1) 1 (2) 2 (3) 3 (4) 4 (5) 5

21.



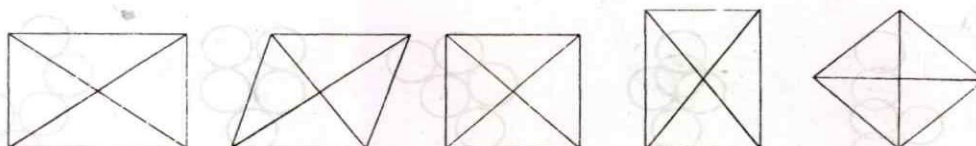
1 2 3 4 5
(1) 1 (2) 2 (3) 3 (4) 4 (5) 5

22.



1 2 3 4 5
(1) 1 (2) 2 (3) 3 (4) 4 (5) 5

23.



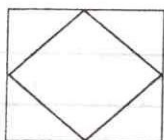
1 2 3 4 5
(1) 1 (2) 2 (3) 3 (4) 4 (5) 5



SNS COLLEGE OF TECHNOLOGY
(An Autonomous Institution)
Coimbatore – 641 035
DEPARTMENT OF MATHEMATICS
23GET276 & VQAR-II

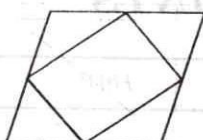


24.



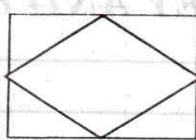
1

(1) 1



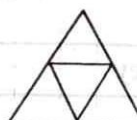
2

(2) 2



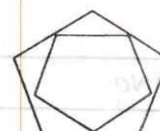
3

(3) 3



4

(4) 4



5

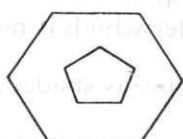
(5) 5

25.



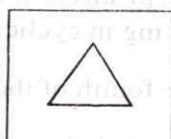
1

(1) 1



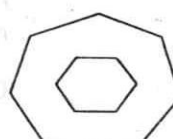
2

(2) 2



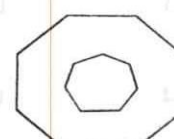
3

(3) 3



4

(4) 4



5

(5) 5





SNS COLLEGE OF TECHNOLOGY
(An Autonomous Institution)
Coimbatore – 641 035
DEPARTMENT OF MATHEMATICS
23GET276 & VQAR-II



KEY AND HINTS

Q.No.	Key	Hint
1	(3)	Except in 3, the figure in left splits and split halves move to opposite direction.
2	(2)	The direction of triangle is reversed.
3	(4)	Except circle and square the other elements are moving in cyclic order which is not in 4.
4	(4)	One-fourth of the figure is shaded, except in 4.
5	(1)	The two halves are not mirror images in 1
6	(4)	Same shape of the figure is found at all the corners except in 4.
7	(5)	The inner figure is reversed in 5
8	(3)	The direction of nose is different in 3
9	(5)	Two lines are observed in other figures expect 5
10	(5)	cyclic order of movement of inner figures is missing in 5
11	(1)	Diagonal are found in all figures expect 1.
12	(4)	Expect 4 the other figures contain only one line in the flag.
13	(4)	The dot occurs not on the hypotenuse
14	(5)	The other figures contain curves, Where as in 5 straight lines.
15	(5)	Expect 5 in other cases, the inner figures are closed.



SNS COLLEGE OF TECHNOLOGY
(An Autonomous Institution)
Coimbatore – 641 035
DEPARTMENT OF MATHEMATICS
23GET276 & VQAR-II



Q.No.	Key	Hint
16	(5)	The dark portion at the top corresponds to odd number of lines, inside the figure
17	(4)	Inner figure is not similar in shape to the outer figures
18	(4)	Diagonal not drawn and the elements inside are different in figure 4.
19	(4)	The dot is out of any circle.
20	(1)	In all the other figures, three lines are there
21	(2)	In the other figures, elements are in clockwise order
22	(1)	The two lines intersect here, where as in the other cases they just touch.
23	(2)	In figure 2 angle at any corner is not a right angle
24	(3)	Parallelogram in a rectangle, where as in other cases, inner and outer shapes are same.
25	(1)	Only in figure 1. no. of sides in inner shape with reference to outer shape is less by 2.